

Year 4 – Home Learning Grid 7

Creative

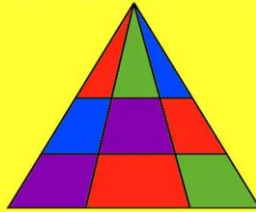
If you could ask a wild animal any question, what would you ask?



What do you think their answer would be? Record or write that conversation.

Mathematical/logical

HOW MANY TRIANGLES?



Physical

Bedroom Disco

Have a disco! Play Freeze, Musical Statues, have a Dance Off!



Discussion

What do you like daydreaming about?




How would you design a tree house?



Joins

Join any four numbers.
Find their total.
Joins can go up, down or sideways, but not diagonally.
The score shown is $8 + 15 + 6 + 18 = 47$.



Find the highest possible score.
Find the lowest possible score.

Keepy Uppys

How many times can you hit an object into the air?
You can use any object: socks, a rubber duck, a ball, a balloon

Head over to the School Sports Twitter to see the teachers having a go
www.twitter.com/Charlestown_Spo

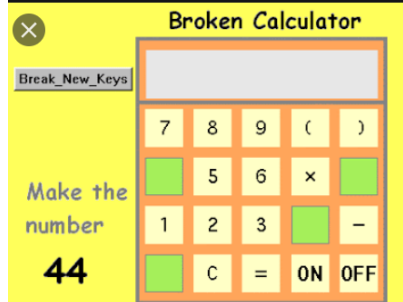
What animal would make a good driver?



Pretend you're a chef, and tell me about your restaurant. What foods do you serve?



Broken Calculator



How many ways can you make 44 using this broken calculator?

Hopscotch

Use chalk or tape to mark out your hopscotch

